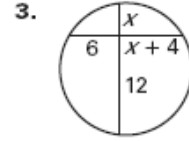
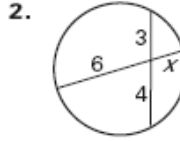
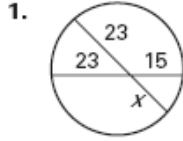
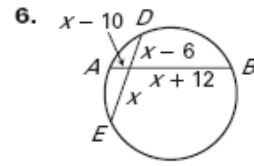
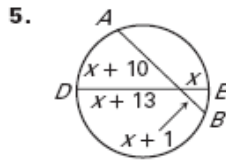
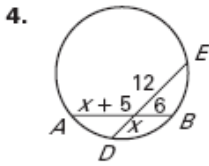


**LESSON 10.6 Practice**  
For use with pages 688–695

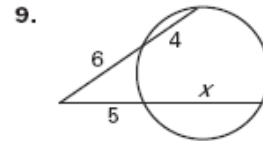
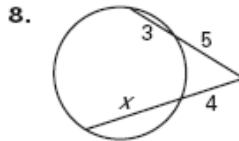
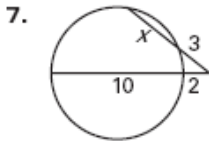
Find the value of  $x$ .



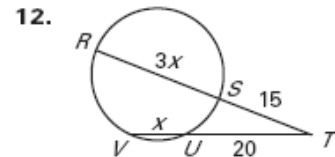
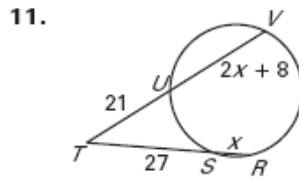
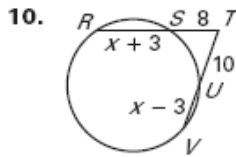
Find  $AB$  and  $DE$ .



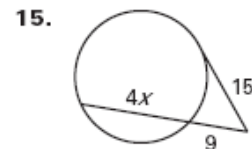
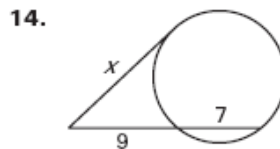
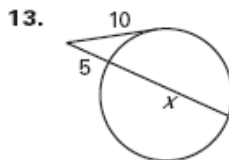
Find the value of  $x$ .



Find  $RT$  and  $TV$ .



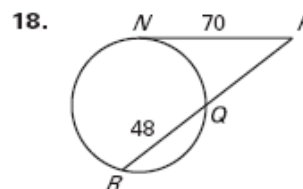
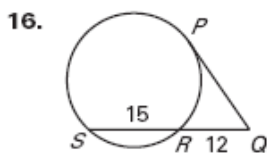
Find the value of  $x$ .



Copyright © by McDougal Littell, a division of Houghton Mifflin Company.

**LESSON 10.6** **Practice** *continued*  
For use with pages 688–695

Find  $PQ$ .



Find the value of  $x$ .

